



Questionnaires



Look at the table and answer the questions given below.



Items	Number of children have it in a class
Pens	32
Pencils	42
Crayons	12
Eraser	40
Pencil Box	22



How many children have pens?

32

How many children have pencil box?

22

Which item has least that the children have?

Crayons

Which item has most that the children have?

Pencils

Look at the table and answer the questions given below.



Names	Letters
Suba	4
Ayesha	6
Geetha	6
Arjun	5
Ravi	4
Sebastian	9

How many names have 4 letters? **2**

How many letters in Sebastian? **9**

How many names have 6 letters? **2**

Which name has 5 letters? **Arjun**

Look at the table and answer the questions given below.



Cars	Number of Cars
Red car	11
Green car	15
Blue car	10
Black car	18
White car	20




How many red cars are there? **11**

How many black cars are there? **18**


How many white cars are there? **20**

How many green cars are there? **15**

Look at the table and answer the questions given below.



Subject	Number of passed students
English	52
Maths	40
Science	48
Social	50
Computer	45



How many students passed in social? 50

Which subject did 45 students pass? Computer


How many students passed in English? 52

How many students passed in Math? 40



Look at the table and answer the questions given below.

Days	No of absent students
Monday	14
Tuesday	10
Wednesday	15
Thursday	20
Friday	7
Saturday	22



How many students absent on Monday? **14**

How many students absent on Wednesday? **15**


On which day 20 students were absent? **Thursday**

On which day most of the students were absent? **Saturday**

Look at the table and answer the questions given below.



Pets name	Number of available pets
Dogs	60
Cats	45
Birds	87
Rabbits	40
Fish	62



How many rabbits in the pet shop? 40

How many cats in the pet shop? 45

How many fish in the pet shop? 62

How many dogs in the pet shop? 60