






Flat Shapes



Find the names for the shapes





- What are the other names for Flat shapes?

- How many dimensions do the flat shapes have?





Find the examples for the rectangle shape?

Find the examples for the square shape?





Find the examples for the triangle shape?

Find the examples for the circle shape?

