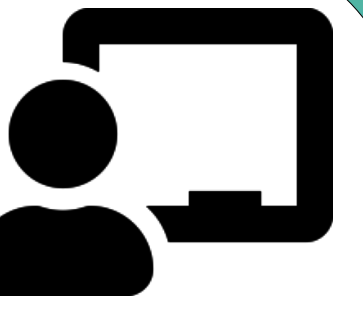


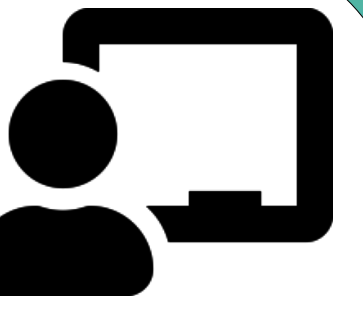
Subtraction with Indian Money



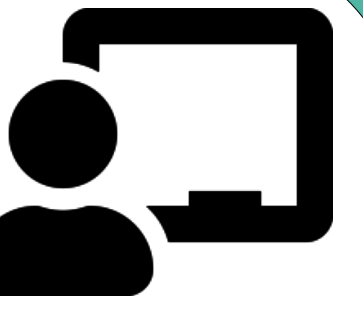
Subtracting coins



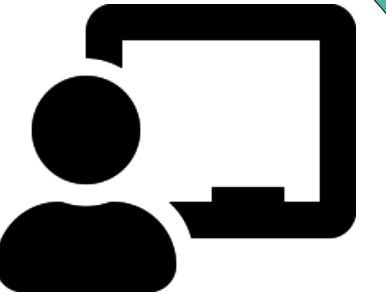
Subtracting coins



Subtracting coins



Subtracting notes



Aria went to a mall and bought things worth ₹70. He gave ₹90 to the shopkeeper. How much money did he get back from the shopkeeper?

$$\begin{array}{r} 90 \\ - 70 \\ \hline \\ \hline \end{array}$$


Prabhu has ₹100. He bought a book for ₹50 and note for ₹30. How much money does he have left now?

Book

Note



₹100



₹50



₹30

