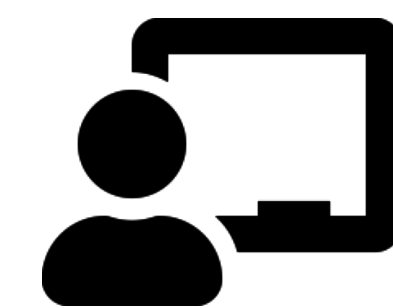


# Subtraction Equation





## Find the balanced subtraction equation

$$9 - 5 = 6 - 2$$


$$8 - 7 = 4 - 3$$

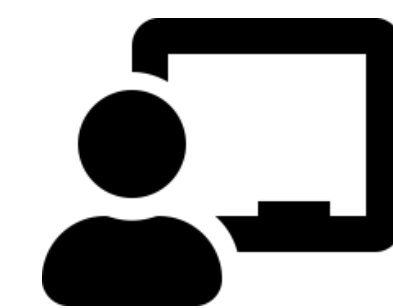
$$5 - 3 = 4 - 2$$

$$6 - 1 = 10 - 5$$

$$7 - 6 = 9 - 8$$

$$11 - 9 = 8 - 6$$





## Find the balanced subtraction equation

$$25 - 5 = 60 - 40$$


$$38 - 5 = 49 - 16$$

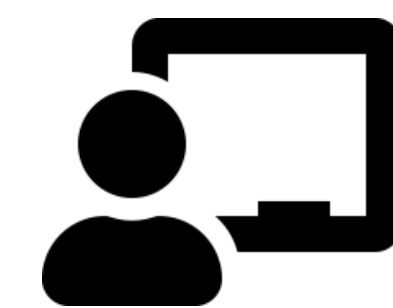
$$49 - 45 = 10 - 6$$

$$20 - 5 = 90 - 75$$

$$18 - 8 = 50 - 40$$


$$61 - 60 = 16 - 15$$






Find the missing number

$$8 - ? = 6 - 3$$

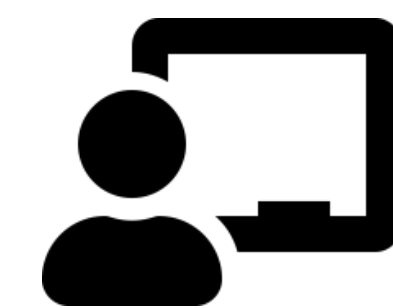




Find the missing number


$$7 - 2 = 9 - ?$$

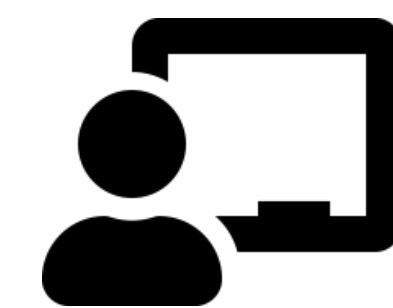




Find the missing number

$$25 - ? = 20 - 10$$





Find the missing number

$$30 - 5 = 50 - ?$$

