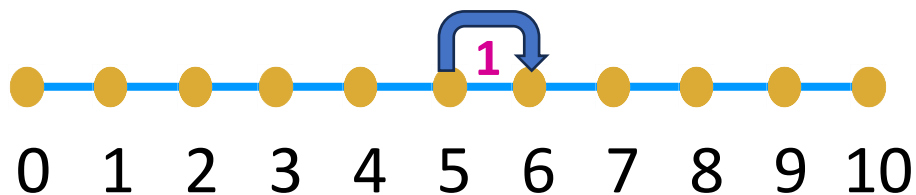


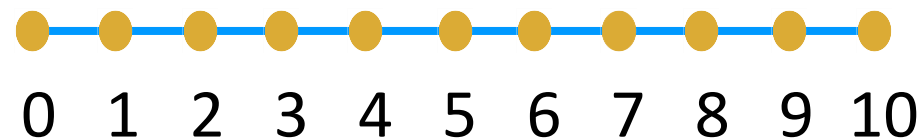


Add the numbers and draw the curves using number line

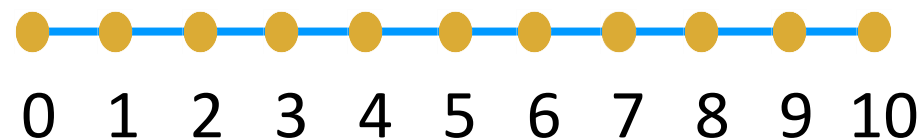
$$5 + 1 = \boxed{6}$$



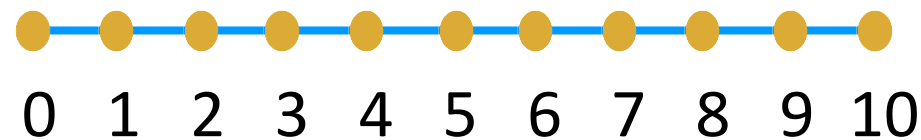
$$2 + 3 = \boxed{}$$



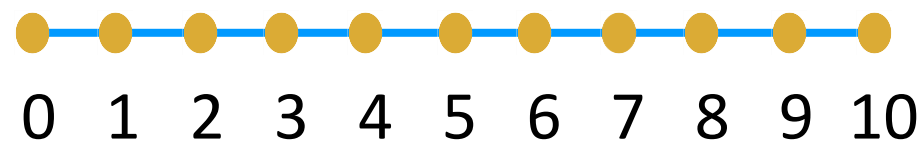
$$1 + 2 = \boxed{}$$



$$4 + 3 = \boxed{}$$



$$2 + 2 = \boxed{}$$



$$0 + 1 = \boxed{}$$

