





# Identify the 2d and 3d shapes and write down it.



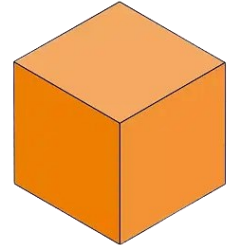
Square




Sphere



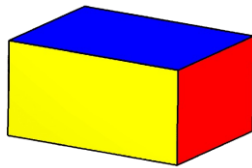
Circle



Cube



Triangle



Cuboid



Cone



Rectangle

## 2D Shapes

Square

\_\_\_\_\_

\_\_\_\_\_

\_\_\_\_\_

\_\_\_\_\_

## 3D Shapes

Sphere

\_\_\_\_\_

\_\_\_\_\_

\_\_\_\_\_

\_\_\_\_\_

