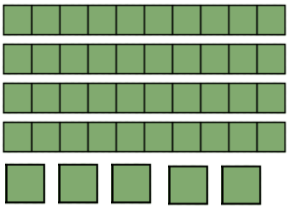




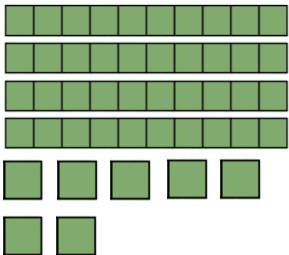

Count the objects and write the total count and **greater than, less than or equal to**



45


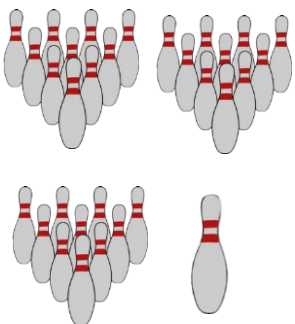
is less than

48

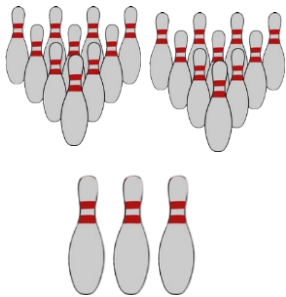
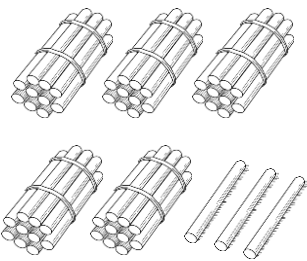
□

□

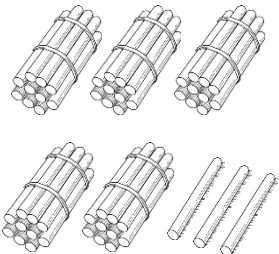
□

□

□

□






Count the objects and write the total count and **greater than, less than or equal to**

Count the objects and write the total count and **greater than, less than or equal to**.

Left: 3 vertical bars of 10 yellow blocks each and 3 single yellow blocks. _____

Right: 3 vertical bars of 10 yellow blocks each and 3 single yellow blocks. _____

Count the objects and write the total count and **greater than, less than or equal to**.

Left: 3 rows of red blocks. Row 1: 10 blocks, Row 2: 8 blocks, Row 3: 4 blocks. _____

Right: 5 rows of red blocks. Row 1: 10 blocks, Row 2: 10 blocks, Row 3: 10 blocks, Row 4: 8 blocks, Row 5: 4 blocks. _____

Count the objects and write the total count and **greater than, less than or equal to**.

Left: 6 bundles of 10 sticks each (3 red, 2 orange, 1 yellow, 2 purple, 1 pink) and 6 single sticks (2 black, 1 red, 1 yellow, 2 green). _____

Right: 4 bundles of 10 sticks each (2 red, 2 orange, 1 purple, 1 pink) and 10 single sticks (2 black, 1 red, 1 yellow, 2 green, 1 black, 1 red, 1 orange). _____

Count the objects and write the total count and **greater than, less than or equal to**.

Left: 4 vertical bars of 10 pink blocks each and 2 single pink blocks. _____

Right: 8 vertical bars of 10 pink blocks each and 2 single pink blocks. _____

