





Draw the images, Fill the box to describe the equally sharing models.

1. Sara and Meera both like mangoes. Share these mangoes equally between them.




Draw the mangoes to show how many they each get.

Sara



Meera



How many do they each get?

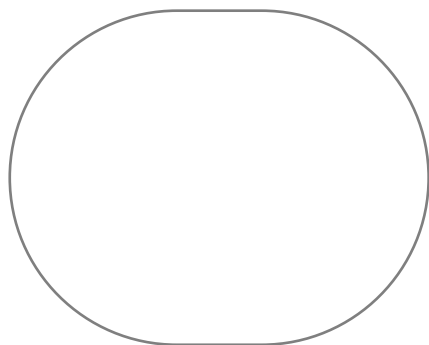
13

2. Kaviya, Pavi and Muthu all like apples. Share these cakes equally between them.

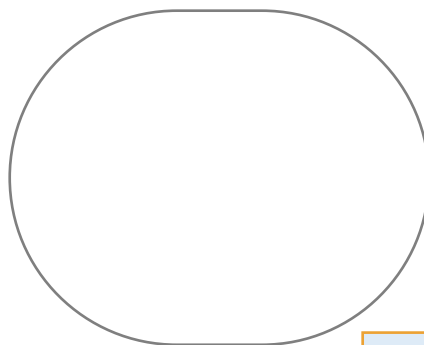


Draw the cakes to show how many they each get.

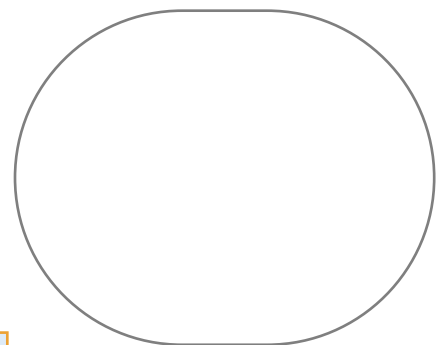
Kaviya




Pavi



Muthu



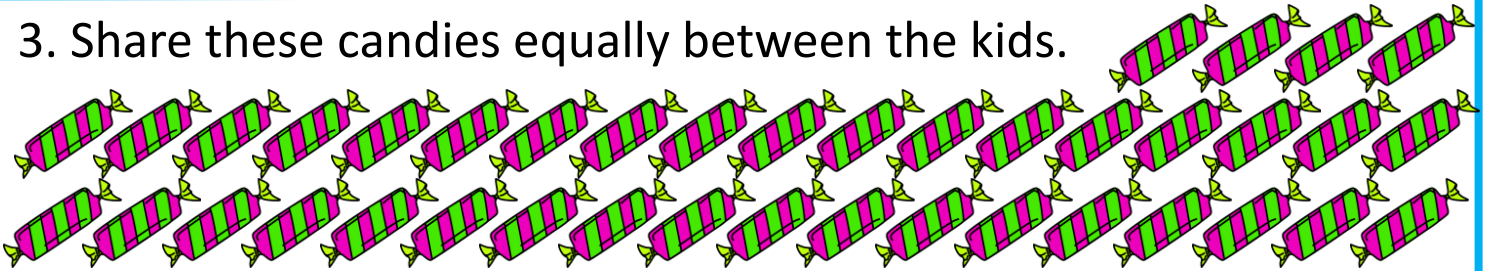
How many do they each get?





Draw the images, Fill the box to describe the equally sharing models.

3. Share these candies equally between the kids.



Draw the candies to show how many they each get.

Kid 1

Kid 2

Kid 3

Kid 4

How many candies each kid will get?

4. Ram and Vishnu both like balloons. Share these balloons equally between them.



Draw the balloons to show how many they each get.

Ram

Vishnu

How many do they each get?

