



# Numbers using objects


Write the number of objects in each group




\_\_\_\_\_ Oranges




\_\_\_\_\_ Bananas



\_\_\_\_\_ Strawberries




\_\_\_\_\_ Avocados




\_\_\_\_\_ Cherries



\_\_\_\_\_ Watermelons



\_\_\_\_\_ Mangoes



\_\_\_\_\_ Apples

