




Thick and Thin

Read the question and draw a circle around your answer.


1. Which is the thickest one?



2. Which is the thinnest one?



3. Which is the thickest one?



4. Which is the thinnest one?






Thick and Thin

Read the question and draw a circle around your answer.


5. Which is the thinnest one?



6. Which is the thickest one?



7. Which is the thickest one?



8. Which is the thinnest one?

