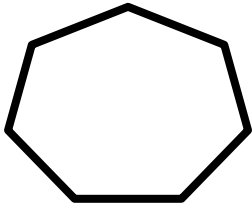
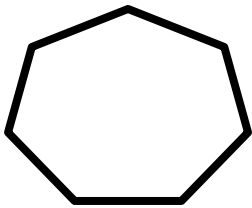




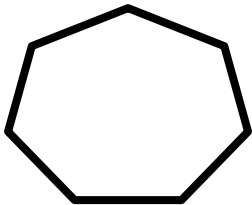
Fill in the correct number using with given tens and ones



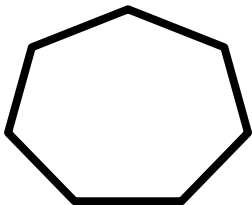
= 4 tens and 7 ones



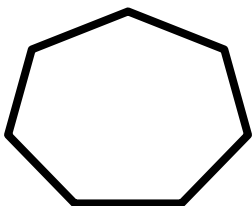
= 8 tens and 2 ones



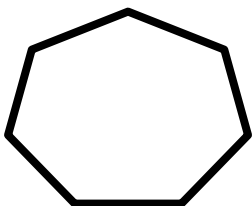
= 5 tens and 8 ones



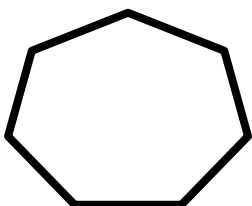
= 6 tens and 4 ones



= 2 tens and 3 ones



= 7 tens and 9 ones



= 3 tens and 6 ones

