





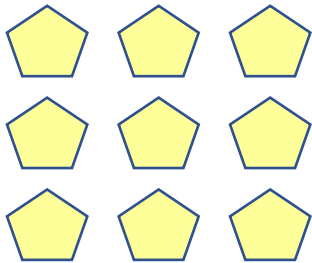
Count the objects, add and write down the addition sentence



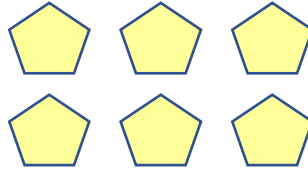
+



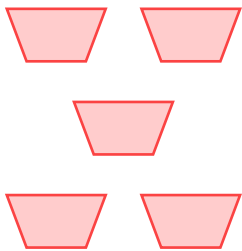
$$\underline{6} + \underline{7} = \underline{13}$$



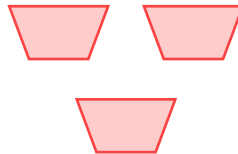
+



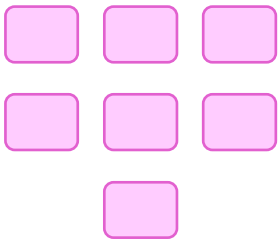
$$\underline{\quad} + \underline{\quad} = \underline{\quad}$$




+



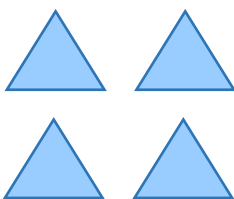
$$\underline{\quad} + \underline{\quad} = \underline{\quad}$$



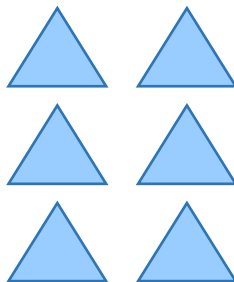
+



$$\underline{\quad} + \underline{\quad} = \underline{\quad}$$



+



$$\underline{\quad} + \underline{\quad} = \underline{\quad}$$

