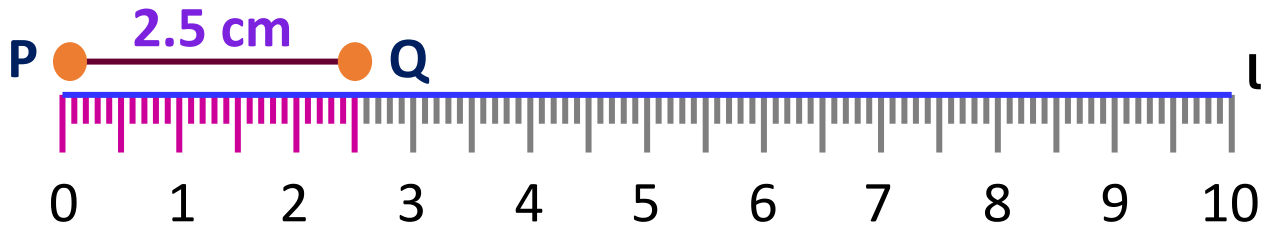


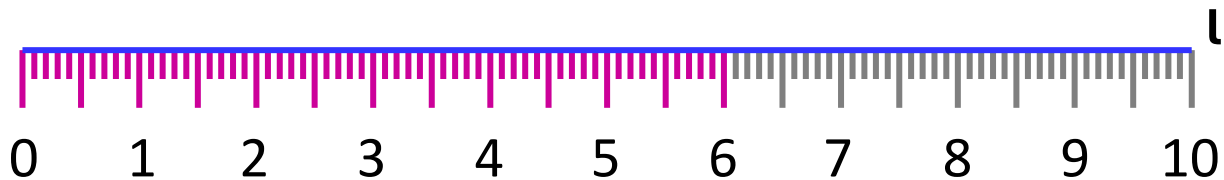


Draw the line segment for the given length

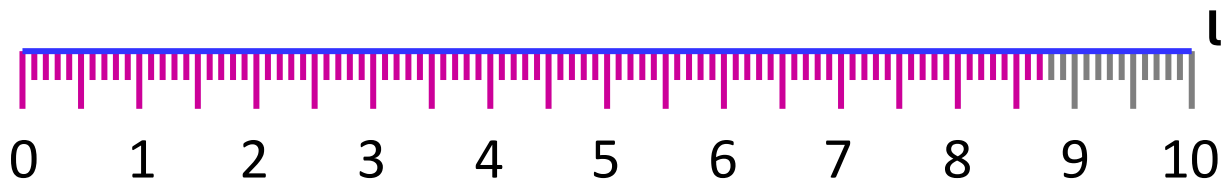
1) Draw a line segment of length $PQ = 2.5 \text{ cm}$ using ruler.



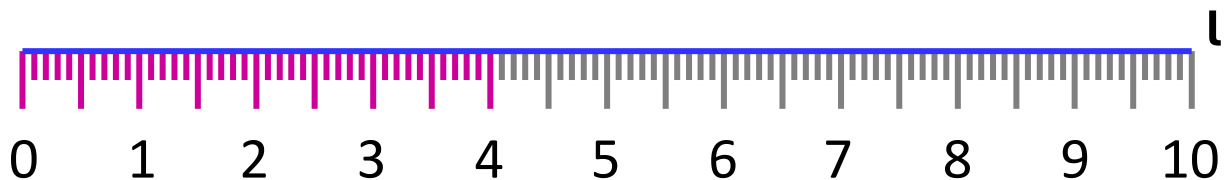
2) Draw a line segment of length $QR = 6 \text{ cm}$ using ruler.



3) Draw a line segment of length $XY = 8.7 \text{ cm}$ using ruler.



4) Draw a line segment of length $ST = 4 \text{ cm}$ using ruler.



5) Draw a line segment of length $IG = 9 \text{ cm}$ using ruler.

