



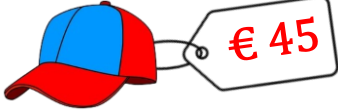







## Subtract the price of each item from the amount and write what's left

Amount	Price of the item	What's left?
 <p style="text-align: right; color: magenta;">€ 55</p>	 <p style="text-align: right; color: red;">€ 54</p>	€1
 <p style="text-align: right; color: magenta;">€ 100</p>	 <p style="text-align: right; color: red;">€ 60</p>	
 <p style="text-align: right; color: magenta;">€ 50</p>	 <p style="text-align: right; color: red;">€ 45</p>	
 <p style="text-align: right; color: magenta;">€ 70</p>	 <p style="text-align: right; color: red;">€ 30</p>	
 <p style="text-align: right; color: magenta;">€ 55</p>	 <p style="text-align: right; color: red;">€ 24</p>	
 <p style="text-align: right; color: magenta;">€ 60</p>	 <p style="text-align: right; color: red;">€ 30</p>	

