











Look at the money and color the correct answer

S. No	Questions									
Q1)	What rupee note is this? <table border="1" data-bbox="253 552 545 825"> <tr> <td>a</td> <td>10</td> </tr> <tr> <td>b</td> <td>200</td> </tr> <tr> <td>c</td> <td>500</td> </tr> <tr> <td>d</td> <td>50</td> </tr> </table>	a	10	b	200	c	500	d	50	
a	10									
b	200									
c	500									
d	50									
Q2)	What rupee note is this? <table border="1" data-bbox="253 926 545 1199"> <tr> <td>a</td> <td>50</td> </tr> <tr> <td>b</td> <td>100</td> </tr> <tr> <td>c</td> <td>5</td> </tr> <tr> <td>d</td> <td>200</td> </tr> </table>	a	50	b	100	c	5	d	200	
a	50									
b	100									
c	5									
d	200									
Q3)	What rupee note is this? <table border="1" data-bbox="253 1297 545 1570"> <tr> <td>a</td> <td>200</td> </tr> <tr> <td>b</td> <td>50</td> </tr> <tr> <td>c</td> <td>5</td> </tr> <tr> <td>d</td> <td>100</td> </tr> </table>	a	200	b	50	c	5	d	100	
a	200									
b	50									
c	5									
d	100									
Q4)	What rupee note is this? <table border="1" data-bbox="253 1669 545 1942"> <tr> <td>a</td> <td>200</td> </tr> <tr> <td>b</td> <td>10</td> </tr> <tr> <td>c</td> <td>500</td> </tr> <tr> <td>d</td> <td>50</td> </tr> </table>	a	200	b	10	c	500	d	50	
a	200									
b	10									
c	500									
d	50									





Look at the money and color the correct answer

S. No	Questions									
Q5)	What rupee note is this? <table border="1" data-bbox="253 552 545 825"> <tr><td>a</td><td>100</td></tr> <tr><td>b</td><td>20</td></tr> <tr><td>c</td><td>500</td></tr> <tr><td>d</td><td>20</td></tr> </table>	a	100	b	20	c	500	d	20	
a	100									
b	20									
c	500									
d	20									
Q6)	What rupee note is this? <table border="1" data-bbox="253 926 545 1199"> <tr><td>a</td><td>20</td></tr> <tr><td>b</td><td>50</td></tr> <tr><td>c</td><td>500</td></tr> <tr><td>d</td><td>100</td></tr> </table>	a	20	b	50	c	500	d	100	
a	20									
b	50									
c	500									
d	100									
Q7)	What rupee note is this? <table border="1" data-bbox="253 1297 545 1570"> <tr><td>a</td><td>200</td></tr> <tr><td>b</td><td>10</td></tr> <tr><td>c</td><td>50</td></tr> <tr><td>d</td><td>100</td></tr> </table>	a	200	b	10	c	50	d	100	
a	200									
b	10									
c	50									
d	100									
Q8)	What rupee note is this? <table border="1" data-bbox="253 1669 545 1942"> <tr><td>a</td><td>10</td></tr> <tr><td>b</td><td>200</td></tr> <tr><td>c</td><td>20</td></tr> <tr><td>d</td><td>50</td></tr> </table>	a	10	b	200	c	20	d	50	
a	10									
b	200									
c	20									
d	50									

