



Compose the given numbers, find and write the final value

1) 4 tens and 2 ones

a) 24

b) 42

c) 22




2) 3 tens and 5 ones

a) 35

b) 54

c) 53




3) 6 tens and 3 ones

a) 64

b) 36

c) 63




4) 9 tens and 8 ones

a) 98

b) 89

c) 96

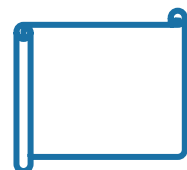


5) 7 tens and 6 ones

a) 74

b) 76

c) 67



6) 0 tens and 9 ones

a) 9

b) 10

c) 29

