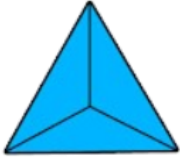




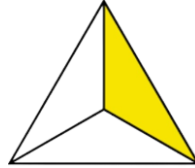
Subtract, write down the answer and color the given figure

1)



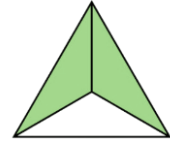
$$\frac{3}{3}$$

-



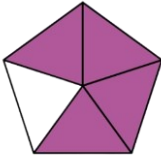
$$\frac{1}{3}$$

=



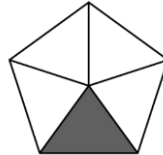
$$\frac{2}{3}$$

2)



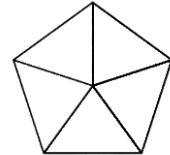
$$\frac{4}{5}$$

-

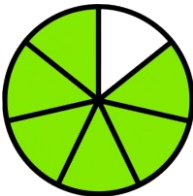


$$\frac{1}{5}$$

=



3)



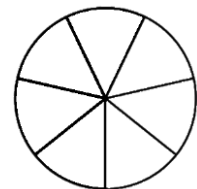
$$\frac{6}{7}$$

-

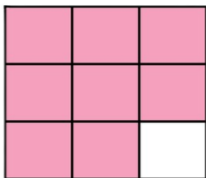


$$\frac{2}{7}$$

=

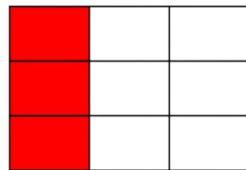


4)



$$\frac{8}{9}$$

-



$$\frac{3}{9}$$

=

