





Look at the underlined number and write the places H for hundreds, T for tens and O for ones.


7 6 2




8 4 1



2 4 9




6 8 0



3 9 9



9 0 0



1 0 4



5 5 5   



4 7 3



7 0 8



2 5 0



3 1 1

