















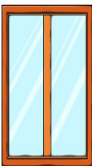













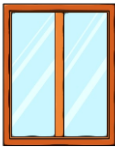




Choose the correct 2d shape for the given questions

Circle	a) 	b) 	c) 	d) 
Square	a) 	b) 	c) 	d) 
Triangle	a) 	b) 	c) 	d) 
Rectangle	a) 	b) 	c) 	d) 
Example for Circle	a) 	b) 	c) 	d) 
Example for Square	a) 	b) 	c) 	d) 
Example for Triangle	a) 	b) 	c) 	d) 
Example for Rectangle	a) 	b) 	c) 	d) 