





Write how many pictures are remaining in each row if you remove the picture that are circled




$$7 - 2 = 5$$



$$7 - 5 =$$




$$6 - 3 =$$



$$3 - 3 =$$



$$8 - 4 =$$



$$6 - 3 =$$



$$9 - 3 =$$