






Classification



Look at the picture and answer the following questions?



1. How many animals are there?

Ans : **5**

2. How many bird is cross out?

Ans :

3. How many birds are there?

Ans :

4. How many animals and birds altogether?

Ans :

5. How many animals are in the box?

Ans :

6. How many birds are in the box?

Ans :

7. How many animals are cross out?

Ans :

