





Count and Compare




How many 9



How many 8

Tick the picture that is fewer?



How many _____




How many _____

Tick the picture that is more?



How many _____




How many _____

Tick the picture that is fewer?





Count and Compare



How many _____

How many _____

Tick the picture that is more?



How many _____

How many _____

Tick the picture that is more?



How many _____

How many _____

Tick the picture that is fewer?

